

1. Work out $72 + 39$
(1 mark)2. Work out $107 - 84$
(1 mark)3. Work out 4×37
(1 mark)4. Work out $205 \div 5$
(1 mark)

5. Round 1264 to the nearest 100

.....
(1 mark)6. Work out $-4 + 12$
(1 mark)7. What is $\frac{1}{5}$ of 15.....
(1 mark)

8. Find 10% of 180

.....
(1 mark)9. Convert $\frac{1}{10}$ to a decimal.....
(1 mark)10. Calculate 8^2
(1 mark)

11. Write down the next two numbers

2, 7, 12, 17,,,

(1 mark)

12. Simplify

 $\frac{5}{10}$
(1 mark)

Name : Class..... Score.....

13. Simplify $d + d + d - d$

 (1 mark)

14. Simplify $2 \times 3f$

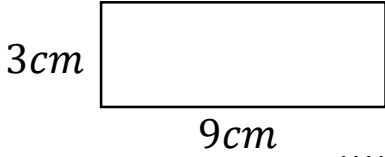
 (1 mark)

15. Expand $2(a - 5)$

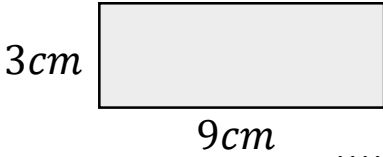
 (2 marks)

16. Write down all the factors of 6

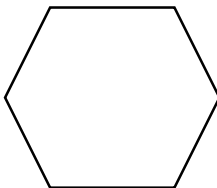
 (1 mark)

17. Calculate the perimeter


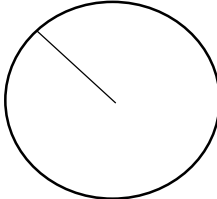
 (1 mark)

18. Calculate the area



 (1 mark)

19. Name this shape


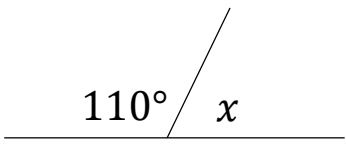
 (1 mark)

20. Name this part of a circle


 (1 mark)

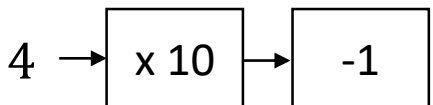
21. Draw all the lines of symmetry


 (1 mark)

22. Calculate x

 $x = \dots\dots\dots$
 (1 mark)

23. Workout
 2×5^2

 (1 mark)

24. Solve


 (1 mark)